



GRADE 12 EXAMINATION  
NOVEMBER 2020

**ADVANCED PROGRAMME MATHEMATICS: PAPER I  
MODULE 1: CALCULUS AND ALGEBRA**

**MARKING GUIDELINES**

Time: 2 hours

200 marks

---

**These marking guidelines are prepared for use by examiners and sub-examiners, all of whom are required to attend a standardisation meeting to ensure that the guidelines are consistently interpreted and applied in the marking of candidates' scripts.**

**The IEB will not enter into any discussions or correspondence about any marking guidelines. It is acknowledged that there may be different views about some matters of emphasis or detail in the guidelines. It is also recognised that, without the benefit of attendance at a standardisation meeting, there may be different interpretations of the application of the marking guidelines.**

---

**QUESTION 1**

1.1 Solve for  $x \in \mathbb{R}$  without using a calculator and showing all working:

$$\begin{aligned} \text{(a)} \quad & 2|e^x - 5| + 3 = 11 \\ & |e^x - 5| = 4 \\ & \therefore e^x - 5 = 4 \quad \text{or} \quad e^x - 5 = -4 \\ & \therefore e^x = 9 \quad \text{or} \quad e^x = 1 \\ & \therefore x = \ln 9 \quad \text{or} \quad x = 0 \end{aligned}$$

ALTERNATIVE 1

$$\begin{aligned} & |e^x - 5| = 4 \\ & (e^x - 5)^2 = 16 \\ & e^{2x} - 10e^x + 9 = 0 \\ & \therefore (e^x - 1)(e^x - 9) = 0 \\ & \therefore e^x = 1 \quad \text{or} \quad e^x = 9 \\ & \therefore x = 0 \quad \text{or} \quad \ln 9 \\ & \text{a check reveals both work} \end{aligned}$$

$$\begin{aligned} \text{(b)} \quad & \ln x = 3 \\ & \therefore x = e^3 \end{aligned}$$

1.2 Determine  $a$  and  $b$  if  $\frac{a+bi}{5-i} = \frac{1}{2} + \frac{1}{2}i$ .

$$\begin{aligned} & \frac{a+bi}{5-i} \\ & = \frac{a+bi}{5-i} \times \frac{5+i}{5+i} \\ & = \frac{5a+bi^2+ai+5bi}{26} \\ & = \frac{5a-b}{26} + \frac{a+5b}{26}i = \frac{13}{26} + \frac{13}{26}i \end{aligned}$$

Equating real and imaginary parts:

$$5a - b = 13 \quad (1) \quad \text{and} \quad a + 5b = 13 \quad (2)$$

multiplying (2) by 5:

$$5a + 25b = 65 \quad (3)$$

subtracting (1) from (3)

$$26b = 52$$

$$\therefore b = 2 \quad \text{and} \quad a = 3$$

## ALTERNATIVE 1

$$\begin{aligned}
 a + bi &= \left(\frac{1}{2} + \frac{1}{2}i\right)(5 - i) \\
 &= \frac{5}{2} + \frac{5}{2}i - \frac{1}{2}i - \frac{1}{2}i^2 \\
 &= 3 + 2i \\
 \therefore a &= 2 \text{ and } b = 2
 \end{aligned}$$

- 1.3 Determine, in standard form, a quartic (degree 4) equation with rational coefficients where two of the roots are equal to  $2 + i$  and  $1 - \sqrt{3}$ .

We know that  $2 - i$  and  $1 + \sqrt{3}$  are also roots since complex and irrational roots occur in conjugate pairs

$$(x - (2 + i))(x - (2 - i))(x - (1 - \sqrt{3}))(x - (1 + \sqrt{3})) = 0$$

$$\begin{aligned}
 \therefore (x^2 - 4x + 5)(x^2 - 2x - 2) &= 0 \\
 \therefore x^4 - 6x^3 + 11x^2 - 2x - 10 &= 0
 \end{aligned}$$

## ALTERNATIVE 1

$$x^2 - (\text{sum of roots})x + \text{product of roots} = 0$$

$$\text{sum of complex roots} = 4$$

$$\text{product of complex roots} = 5$$

$$\text{sum of irrational roots} = 2$$

$$\text{product of irrational roots} = -2$$

$$\therefore (x^2 - 4x + 5)(x^2 - 2x - 2) = 0$$

$$\therefore x^4 - 6x^3 + 11x^2 - 2x - 10 = 0$$

**QUESTION 2**

For a given annual interest rate, the yield is improved by compounding the interest more frequently. However, a limit exists. If interest is compounded continuously then the following formula applies:

$$A = Pe^{rt}$$

Where:

- $P$  is the principle invested
- $A$  is the accumulated amount
- $r$  is the annual interest rate expressed as a percentage
- $t$  is the time in years

2.1 By first making  $t$  the subject of the formula, determine how long it will take the money invested to triple in value if interest is 10% per annum. Express your answer to the nearest year.

$$\begin{aligned}\frac{A}{P} &= e^{rt} \\ \therefore rt &= \ln \frac{A}{P} \\ \therefore t &= \frac{\ln \frac{A}{P}}{r} \\ \therefore t &= \frac{\ln 3}{0,1} \\ \therefore t &= 11 \text{ years}\end{aligned}$$

2.2 By first making  $r$  the subject of the formula, determine the annual interest rate (expressed as a percentage to 2 decimal places) that will increase R500 to a total of R900 in 3 years.

$$\begin{aligned}\therefore rt &= \ln \frac{A}{P} \\ \therefore r &= \frac{\ln \frac{A}{P}}{t} \\ \therefore r &= \frac{\ln \frac{900}{500}}{3} \\ \therefore r &= 19,59\%\end{aligned}$$

**QUESTION 3**

Use mathematical induction to prove that  $n^3 + 2n$  is divisible by 3 for  $n \in \mathbb{N}$ .

When  $n = 1$  we have  $1^3 + 2(1) = 3$  which is divisible by 3

So, it is true for  $n = 1$

Assume true for  $n = k$

viz.  $k^3 + 2k = 3p$  for  $p \in \mathbb{N}$

$$\begin{aligned}\text{now } (k+1)^3 + 2(k+1) &= k^3 + 3k^2 + 3k + 1 + 2k + 2 \\ &= (k^3 + 2k) + 3k^2 + 3k + 3 \\ &= 3p + 3(k^2 + k + 1)\end{aligned}$$

which is clearly divisible by 3

so, we have proved it true for  $n = k + 1$

$\therefore$  by the principle of mathematical induction, we have proved it true for  $n \in \mathbb{N}$

**ALTERNATIVE 1**

When  $n = 1$  we have  $1^3 + 2(1) = 3$  which is divisible by 3 – proving true for  $n = 1$  so

it is true for  $n = 1$

Assume true for  $n = k$

viz.  $k^3 + 2k$  is divisible by 3

$$\begin{aligned}\text{now } (k+1)^3 + 2(k+1) &= k^3 + 3k^2 + 3k + 1 + 2k + 2 \\ &= (k^3 + 2k) + 3k^2 + 3k + 3 \\ &= (k^3 + 2k) + 3(k^2 + k + 1)\end{aligned}$$

which is clearly divisible by 3

so, we have proved it true for  $n = k + 1$

$\therefore$  by the principle of mathematical induction, we have proved it true for  $n \in \mathbb{N}$

**QUESTION 4**

Determine  $f'(x)$  by first principles if  $f(x) = \sqrt{1-x}$ .

$$\begin{aligned} f'(x) &= \lim_{h \rightarrow 0} \frac{\sqrt{1-(x+h)} - \sqrt{1-x}}{h} \\ &= \lim_{h \rightarrow 0} \frac{\sqrt{1-(x+h)} - \sqrt{1-x}}{h} \times \frac{\sqrt{1-(x+h)} + \sqrt{1-x}}{\sqrt{1-(x+h)} + \sqrt{1-x}} \\ &= \lim_{h \rightarrow 0} \frac{1-(x+h) - (1-x)}{h(\sqrt{1-(x+h)} + \sqrt{1-x})} \\ &= \lim_{h \rightarrow 0} \frac{-h}{h(\sqrt{1-(x+h)} + \sqrt{1-x})} \\ &= \lim_{h \rightarrow 0} \frac{-1}{\sqrt{1-(x+h)} + \sqrt{1-x}} \\ &= \frac{-1}{2\sqrt{1-x}} \end{aligned}$$

**QUESTION 5**

5.1 Consider the function  $f(x) = \frac{2x^2 + 2x - 3}{x^2 - 5x - 6}$ .

(a) Give the equations and nature of all asymptotes.

$$f(x) = \frac{2x^2 + 2x - 3}{(x-6)(x+1)}$$

so, vertical asymptotes of  $x = 6$  and  $x = -1$

horizontal asymptote of  $y = 2$

(b) Prove that the function is strictly decreasing.

$$\begin{aligned} f(x) &= \frac{2x^2 + 2x - 3}{x^2 - 5x - 6} \\ \therefore f'(x) &= \frac{(4x+2)(x^2 - 5x - 6) - (2x-5)(2x^2 + 2x - 3)}{(x^2 - 5x - 6)^2} \\ \therefore f'(x) &= \frac{4x^3 - 18x^2 - 34x - 12 - (4x^3 - 6x^2 - 16x + 15)}{(x^2 - 5x - 6)^2} \\ \therefore f'(x) &= \frac{-12 \left[ x^2 + \frac{3}{2}x + \frac{27}{12} \right]}{(x^2 - 5x - 6)^2} \\ \therefore f'(x) &= \frac{-12 \left[ \left( x + \frac{3}{4} \right)^2 - \frac{9}{16} + \frac{27}{12} \right]}{(x^2 - 5x - 6)^2} \\ \therefore f'(x) &= \frac{-12 \left[ \left( x + \frac{3}{4} \right)^2 + \frac{27}{16} \right]}{(x^2 - 5x - 6)^2} \\ \therefore f'(x) &= \frac{-12 \left( x + \frac{3}{4} \right)^2 - \frac{81}{4}}{(x^2 - 5x - 6)^2} \end{aligned}$$

which is always negative so the function is strictly decreasing

## ALTERNATIVE 1

$$\begin{aligned}
 f(x) &= \frac{2x^2 + 2x - 3}{x^2 - 5x - 6} \\
 &= \frac{2x^2 + 2x - 3}{(x-6)(x+1)} \\
 &= \frac{A}{x-6} + \frac{B}{x+1} \\
 &= \frac{81}{7}(x-6)^{-1} + \frac{3}{7}(x+1)^{-1}
 \end{aligned}$$

$$\begin{aligned}
 f'(x) &= -\frac{81}{7(x-6)^2} - \frac{3}{7(x+1)^2} \\
 &< 0 \\
 &\text{so, } f \text{ is always decreasing}
 \end{aligned}$$

## ALTERNATIVE 2

$$\begin{aligned}
 f(x) &= \frac{2x^2 + 2x - 3}{x^2 - 5x - 6} \\
 \therefore f'(x) &= \frac{(4x+2)(x^2 - 5x - 6) - (2x-5)(2x^2 + 2x - 3)}{(x^2 - 5x - 6)^2} \\
 \therefore f'(x) &= \frac{-12x^2 - 18x - 27}{(x^2 - 5x - 6)^2}
 \end{aligned}$$

now, numerator has no real roots  $\left(-\frac{3}{4} \pm \frac{3\sqrt{3}}{4}i\right)$  and is concave down

so is always negative

$\therefore f$  is decreasing



ALTERNATIVE 3

$$f(x) = \frac{2x^2 + 2x - 3}{x^2 - 5x - 6}$$

$$\therefore f'(x) = \frac{(4x+2)(x^2 - 5x - 6) - (2x-5)(2x^2 + 2x - 3)}{(x^2 - 5x - 6)^2}$$

$$\therefore f'(x) = \frac{-12x^2 - 18x - 27}{(x^2 - 5x - 6)^2}$$

now, in the numerator:

turning point :  $x = -\frac{b}{2a} = -\frac{3}{4}$  (or use calculus) and  $y = -\frac{81}{4}$

it is concave down

so  $f'$  is always negative

$\therefore f$  is always decreasing

5.2 Give the equation of a rational function which has:

- an oblique asymptote of  $y = 2x + 1$
- a vertical asymptote of  $x = -2$
- no x-intercepts

$$(x+2)(2x+1) + \text{remainder}$$

$$y = \frac{2x^2 + 5x + 13}{x+2}$$

**NOTE:**

Answer is not unique c must be bigger than 25/8

ALTERNATIVE 1

$$y = 2x + 1 + \frac{a}{x+2}$$

$$= \frac{(2x+1)(x+2) + a}{x+2}$$

$$= \frac{2x^2 + 5x + 2 + a}{x+2}$$

$$\text{now } \Delta = 5^2 - 4(2)(2+a)$$

$$= 9 - 8a$$

we need  $\Delta < 0$

$$\therefore a < \frac{9}{8}$$

$$\therefore y = 2x + 1 + \frac{2^*}{x+2} \left( \text{*any value bigger than } \frac{9}{8} \right)$$

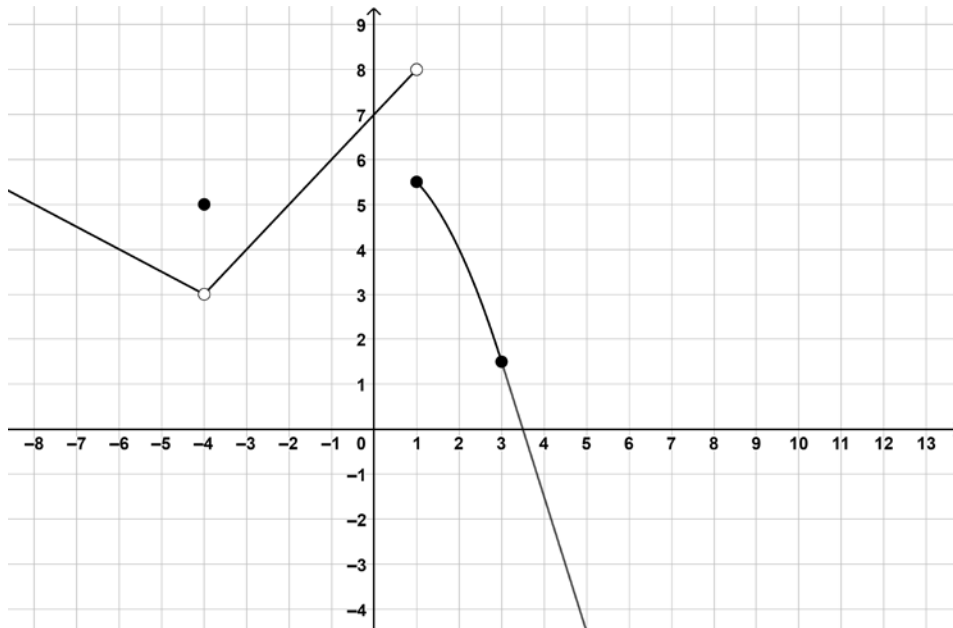
$$\text{or } y = \frac{2x^2 + 5x + 4\#}{x+2} \left( \# \text{ any value bigger than } \frac{9}{8} + 2 \right)$$

**QUESTION 6**

Consider the function,  $f$ , defined as follows:

$$f(x) = \begin{cases} -0,5x + 1 & x < -4 \\ 5 & x = -4 \\ x + 7 & -4 < x < 1 \\ -0,5x^2 + 6 & 1 \leq x \leq 3 \\ ax + b & x \geq 3 \end{cases}$$

$f$  is depicted in the graph below:



6.1 Identify, by means of their  $x$ -coordinates, any points of discontinuity. You should also classify the discontinuity and justify your classifications mathematically. Pay careful attention to notation.

There is a removable discontinuity at  $x = -4$   
 since  $\lim_{x \rightarrow -4} f(x) \neq f(-4)$

There is a non-removable/jump discontinuity at  $x = 1$   
 since  $\lim_{x \rightarrow 1} f(x) d.n.e$

6.2 Determine  $a$  and  $b$  if  $f$  is differentiable at  $x = 3$ .

If  $f$  is differentiable at 3 it needs to be continuous at 3.

$$\lim_{x \rightarrow 3^-} f(x) = 1,5$$

$$\text{so } \lim_{x \rightarrow 3^+} (ax + b) = 1,5$$

$$\therefore 3a + b = 1,5$$

but we also know that  $\lim_{x \rightarrow 3^-} f'(x) = \lim_{x \rightarrow 3^+} f'(x)$

$$\text{so } \lim_{x \rightarrow 3^-} (-x) = \lim_{x \rightarrow 3^+} a$$

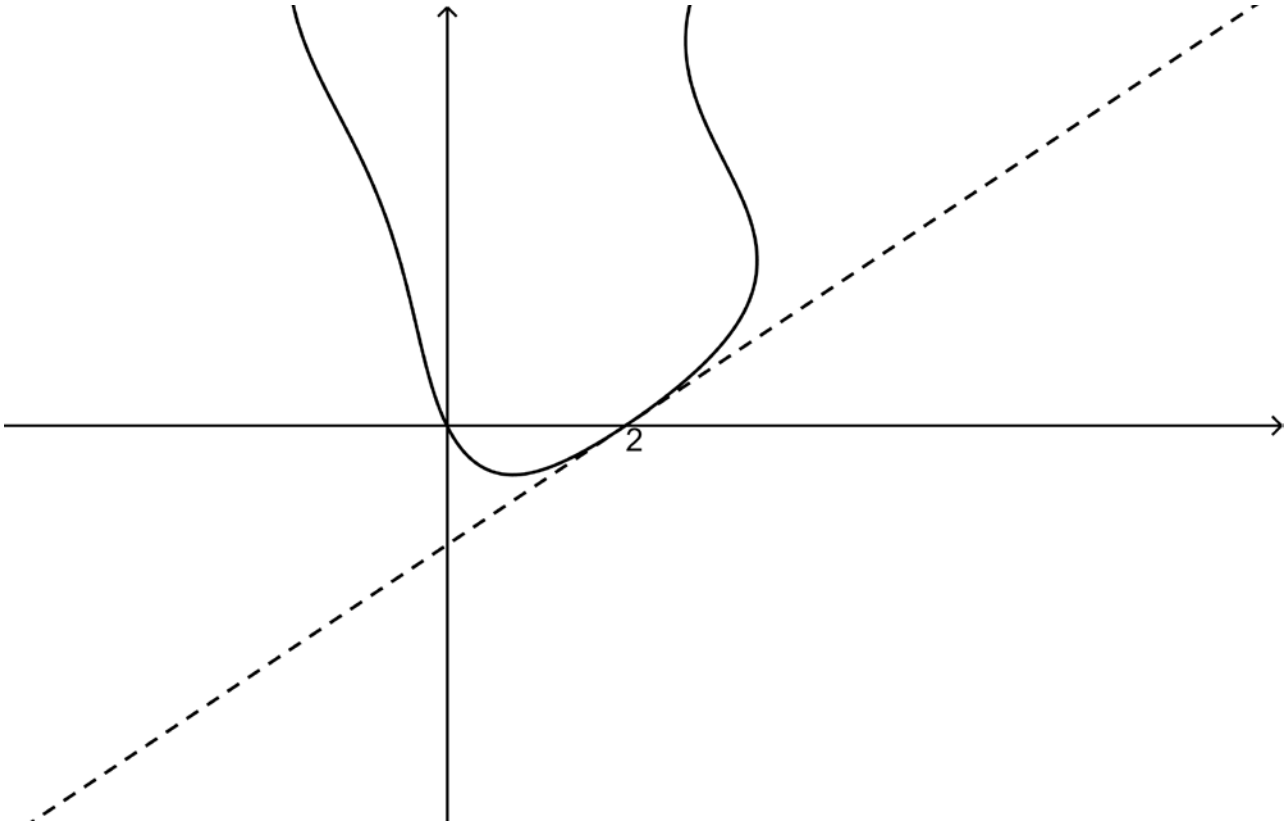
$$\therefore -3 = a$$

$$\therefore b = 10,5$$

**QUESTION 7**

A portion of the implicitly defined curve  $x^2 - x \sin y = y + 2x$  is shown below.

Determine the equation of the tangent to the curve at the point  $(2; 0)$ .



$$\begin{aligned}
 2x - (1 \sin y + xy' \cos y) &= y' + 2 \\
 \therefore 2x - \sin y - xy' \cos y - y' &= 2 \\
 \therefore y'(-x \cos y - 1) &= 2 - 2x + \sin y \\
 \therefore y' &= \frac{2 - 2x + \sin y}{-x \cos y - 1}
 \end{aligned}$$

when  $x = 2$  and  $y = 0$

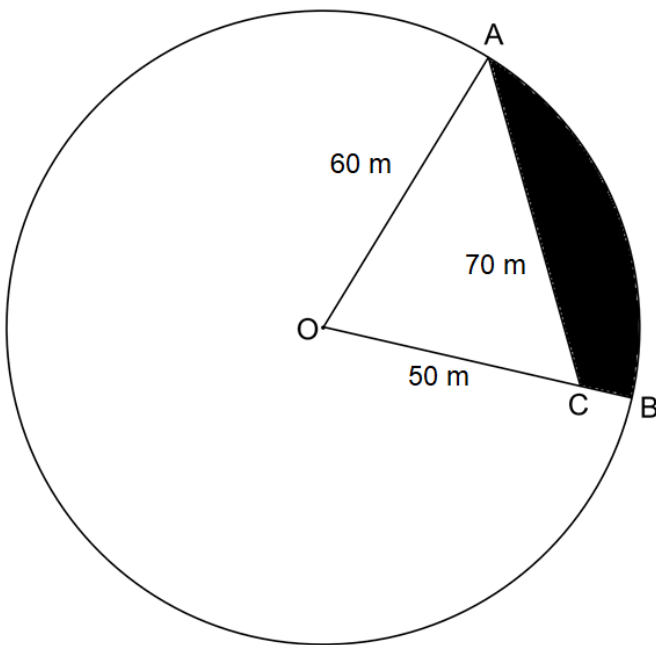
$$\begin{aligned}
 y' &= \frac{2 - 4 + 0}{-2 - 1} = \frac{2}{3} \\
 \therefore y - 0 &= \frac{2}{3}(x - 2) \\
 \therefore y &= \frac{2}{3}x - \frac{4}{3}
 \end{aligned}$$

**QUESTION 8**



[Source: <<https://www.northwesthydro.com.au/blog/solar-pumping-for-centre-pivot-irrigation/>>]

The sketch below is of a circular field with a centre pivot irrigation system on it. O is the centre and OCB is a straight line. OA is 60 m and OC is 50 m. AC is 70 m.



An aerial photo of the field has shown that the shaded area is infected with weeds. What percentage of the field is infected?

$$\text{let } \hat{BOA} = \theta \text{ then } \cos \theta = \frac{50^2 + 60^2 - 70^2}{2(50)(60)} = \frac{1}{5}$$

$$\therefore \theta = \cos^{-1} \frac{1}{5} = 1,369$$

now shaded area = sector AOB – ΔAOC

$$\begin{aligned} &= \frac{1}{2} 60^2 (1,369) - \frac{1}{2} (60)(50) \sin(1,369) \\ &= 995,295 \end{aligned}$$

As a percentage of the total:

$$\frac{995,295}{\pi \times 60^2} \times 100 = 8,8\%$$

## ALTERNATIVE 1

$$\text{let } \hat{B\hat{O}A} = \theta \text{ then } \cos \theta = \frac{50^2 + 60^2 - 70^2}{2(50)(60)} = \frac{1}{5}$$

$$\therefore \theta = \cos^{-1} \frac{1}{5} = 1,369$$

$$\frac{\sin \hat{A\hat{C}O}}{60} = \frac{\sin 1,3694\dots}{70}$$

$$\therefore \hat{A\hat{C}O} = 0,99696\dots$$

$$\therefore \hat{A\hat{C}B} = \pi - 0,99696\dots$$

$$\therefore \hat{A\hat{C}B} = 214463\dots$$

Area = Area  $\triangle ACB$  + segment  $AB$

$$= \frac{1}{2}(70)(10)\sin 2,1446 + \frac{1}{2}(60^2)(1,369\dots - \sin 1,369\dots)$$

$$= 293,9387\dots + 701,3565\dots$$

$$= 995,295$$

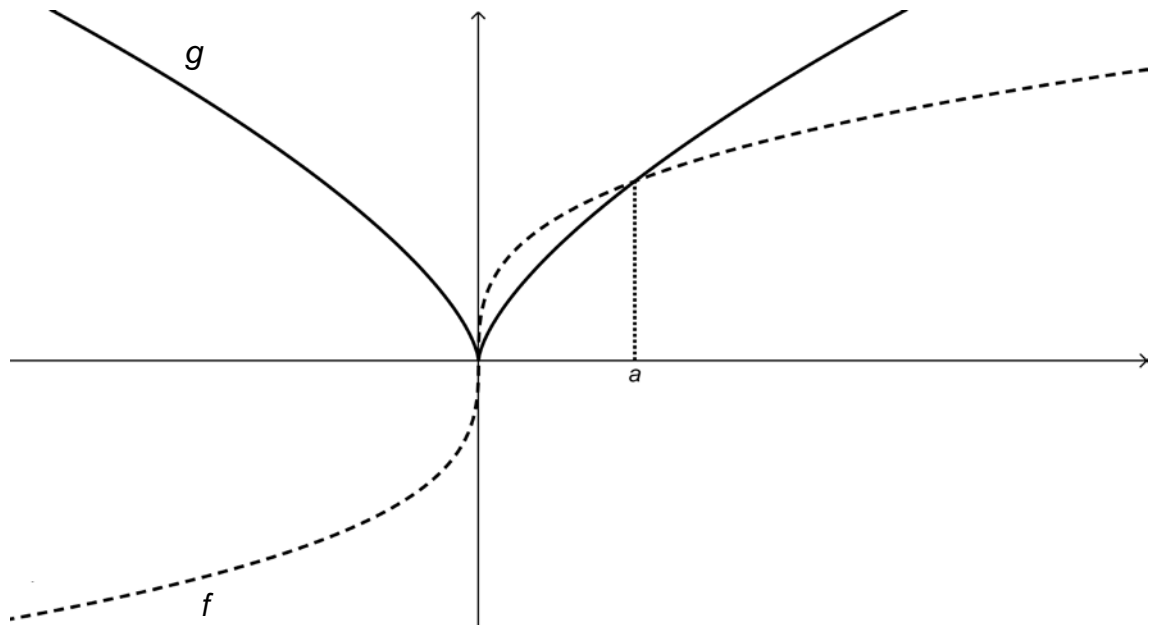
As a percentage of the total:

$$\frac{995,295}{\pi \times 60^2} \times 100 = 8,8\%$$

**QUESTION 9**

9.1 Consider the two functions below:

$f$  is an **odd** function since  $f(-x) = -f(x)$  while  $g$  is an **even** function since  $g(-x) = g(x)$ . To help you distinguish them,  $f$  has been drawn with a dotted line and  $g$  with a solid line.  $f$  and  $g$  intersect at  $x = a$ .



If it is further given that  $\int_0^a f(x) dx = 0,75$  and  $\int_0^a g(x) dx = 0,6$  then determine the following:

(a) 
$$\int_0^a f(x) - g(x) dx$$

$$= \int_0^a f(x) dx - \int_0^a g(x) dx$$

$$= 0,75 - 0,6$$

$$= 0,15$$

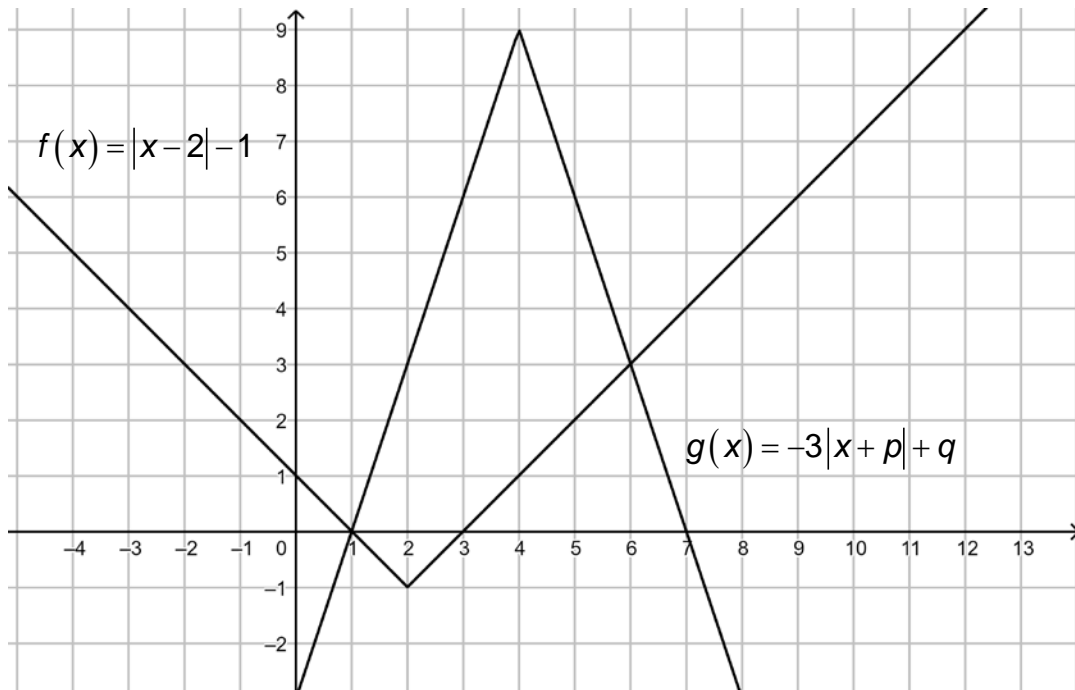
$$\begin{aligned} \text{(b)} \quad & \int_{-a}^0 f(x) + g(x) \, dx \\ &= \int_{-a}^0 f(x) \, dx + \int_{-a}^0 g(x) \, dx \\ &= -0,75 + 0,6 \\ &= -0,15 \end{aligned}$$

$$\begin{aligned} \text{(c)} \quad & \int_{-a}^a 2f(x) + 3g(x) \, dx \\ &= 2 \int_{-a}^a f(x) \, dx + 3 \int_{-a}^a g(x) \, dx \\ &= 2(0) + 3(2 \times 0,6) \\ &= 3,6 \end{aligned}$$

$$\begin{aligned} \text{(d)} \quad & \int_{-a}^a f(|x|) \, dx \\ &= 2 \int_0^a f(x) \, dx \\ &= 2 \times 0,75 \\ &= 1,5 \end{aligned}$$



9.2 Consider the functions  $f(x) = |x - 2| - 1$  and  $g(x) = -3|x + p| + q$  drawn below:



(a) Determine the values of  $p$  and  $q$ .

$$p = -4 \text{ and } q = 9$$

ALTERNATIVE 1

using the points  $(1;0)$  and  $(7;0)$

$$0 = -3|1 + p| + q$$

$$q = -3 - 3p \quad (1)$$

$$0 = -3|7 + p| + q$$

$$q = 21 + 3p \quad (2)$$

solving (1) and (2) simultaneously:

$$-3 - 3p = 21 + 3p$$

$$\therefore p = -4 \text{ and } q = 9$$

(b) Using the graphs, or otherwise, solve:  $|x - 2| + 3|x - 4| > 10$ .

$$|x - 2| + 3|x - 4| > 10$$

$$\therefore |x - 2| > -3|x - 4| + 10$$

$$\therefore |x - 2| - 1 > -3|x - 4| + 9$$

but this is just where  $f > g$

so,  $x < 1$  or  $x > 6$

ALTERNATIVE 1 (ALGEBRAICALLY)

$$|x - 2| + 3|x - 4| > 10$$

case 1:  $x < 2$

$$-x + 2 - 3(x - 4) > 10$$

$$-x + 2 - 3x + 12 > 10$$

$$\therefore -4x > -4$$

$\therefore x < 1$  - consistent therefore a part of the solution

case 2:  $2 \leq x < 4$

$$x - 2 - 3(x - 4) > 10$$

$$x - 2 - 3x + 12 > 10$$

$$-2x + 10 > 10$$

$$-2x > 0$$

$x < 0$  - a contradiction - therefore no solution

case 3:  $x \geq 4$

$$x - 2 + 3(x - 4) > 10$$

$$\therefore x - 2 + 3x - 12 > 10$$

$$\therefore 4x - 14 > 10$$

$$\therefore 4x > 24$$

$\therefore x > 6$  - consistent therefore a part of the solution

$\therefore x < 1$  or  $x > 6$

(c) Determine  $\int_1^7 g(x) dx$

$$\begin{aligned} &= \int_1^4 3x - 3 dx + \int_4^7 -3x + 21 dx \\ &= \left[ \frac{3x^2}{2} - 3x \right]_1^4 - \left[ \frac{-3x^2}{2} + 21x \right]_4^7 \\ &= 13,5 + 13,5 \\ &= 27 \end{aligned}$$

ALTERNATIVE 1

$$\int_1^7 -3|x - 4| + 9 dx = 27 \text{ (using calculator)}$$

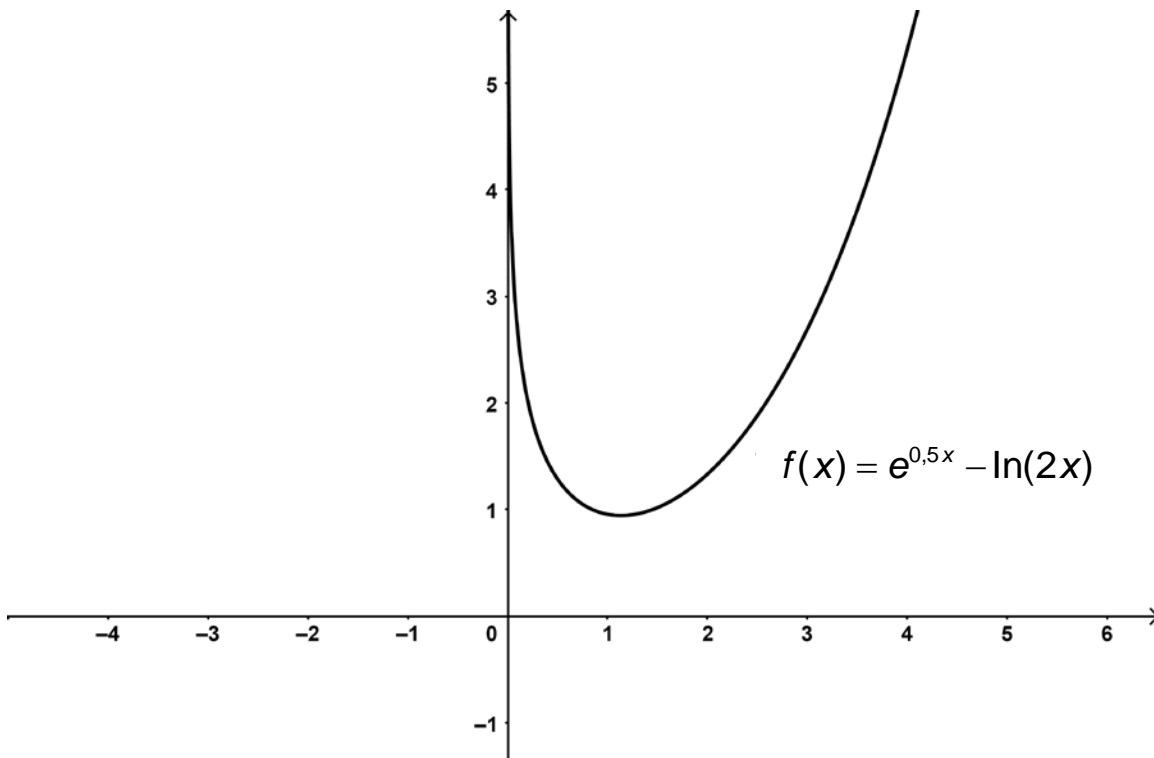
ALTERNATIVE 2

**Area of triangle =**

$$\begin{aligned} &\frac{1}{2} \times \text{base} \times \text{ht} \\ &= \frac{1}{2}(6)(9) \\ &= 27 \text{ units}^2 \end{aligned}$$

**QUESTION 10**

Use Newton-Raphson iteration to find the turning point of the given function.



You should:

- Show the iterative formula you use.
- Use an initial approximation of  $x = 2$ .
- Show your first approximation to 5 decimal places.

$$f(x) = e^{0.5x} - \ln(2x)$$

$$\text{so } f'(x) = \frac{1}{2}e^{0.5x} - \frac{2}{2x}$$

$$\text{we want to solve } \frac{1}{2}e^{0.5x} - \frac{1}{x} = 0$$

so this is our  $f(x)$

$$\text{then } f'(x) = \frac{1}{4}e^{0.5x} + \frac{1}{x^2}$$

$$\text{so } x_{n+1} = x_n - \frac{\frac{1}{2}e^{0.5x_n} - \frac{1}{x_n}}{\frac{1}{4}e^{0.5x_n} + \frac{1}{x_n^2}}$$

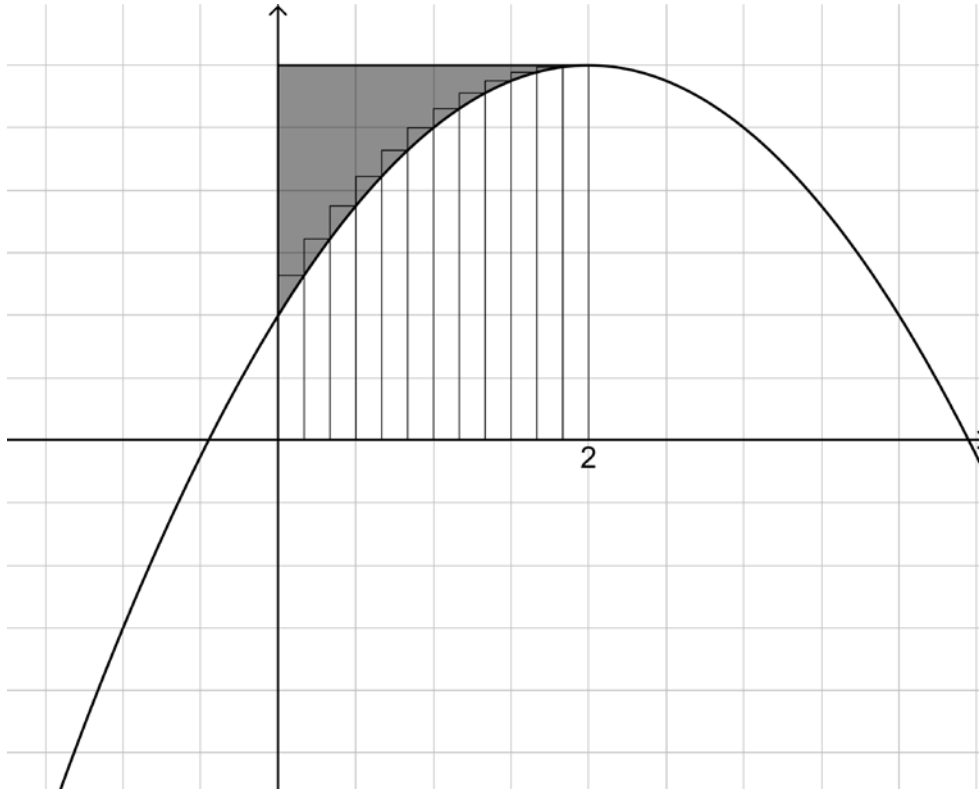
$$\therefore x_1 = 1,07577$$

$$\therefore x = 1,13429$$

**QUESTION 11**

11.1 When the area bounded by the curve  $f$ , the  $x$ -axis and the lines  $x = 0$  and  $x = 2$  is partitioned into  $n$  rectangles the area is given by:

$$A = -\frac{8}{3} - \frac{4}{3n^2} + 12 + \frac{4}{n}$$



If it is further given that  $f(2) = 6$  then determine the shaded area, correct to 2 decimal places.

$$\text{Area between curve and } x\text{-axis} = \lim_{n \rightarrow \infty} \left( -\frac{8}{3} - \frac{4}{3n^2} + 12 + \frac{4}{n} \right) = \frac{28}{3}$$

$$\begin{aligned} \text{so, shaded area} &= 2 \times 6 - \frac{28}{3} \\ &= 12 - \frac{28}{3} \\ &= \frac{36}{3} - \frac{28}{3} \\ &= \frac{8}{3} \text{ units}^2 \end{aligned}$$

11.2 Determine:

$$(a) \int x(3x^2 + 7)^3 dx$$

$$= \frac{(3x^2 + 7)^4}{24} + c$$

ALTERNATIVE 1

$$\begin{aligned} & \int x(3x^2 + 7)^3 dx \\ &= \frac{1}{6} \int 6x(3x^2 + 7)^3 dx \\ &= \frac{1}{6} \frac{(3x^2 + 7)^4}{4} + c \\ &= \frac{1}{24} (3x^2 + 7)^4 + c \end{aligned}$$

ALTERNATIVE 2

$$\begin{aligned} & \int x(3x^2 + 7)^3 dx \\ & \text{let } u = 3x^2 + 7 \\ & \therefore \frac{du}{dx} = 6x \\ & \therefore \frac{1}{6} du = x dx \\ & \therefore \frac{1}{6} \int u^3 du \\ &= \frac{1}{6} \times \frac{u^4}{4} + c \\ &= \frac{(3x^2 + 7)^4}{24} + c \end{aligned}$$

## ALTERNATIVE 3

$$\begin{aligned} & \int x(3x^2 + 7)^3 dx \\ &= \int 27x^7 + 189x^5 + 441x^3 + 343x dx \\ &= \frac{27}{8}x^8 + \frac{63}{2}x^6 + \frac{441}{4}x^4 + \frac{243}{2}x^2 + c \end{aligned}$$

(b)  $\int e^{2x} x dx$

let  $f(x) = x$  and  $g'(x) = e^{2x}$

then  $f'(x) = 1$  and  $g(x) = \frac{1}{2}e^{2x}$

$$\begin{aligned} \int e^{2x} x dx &= \frac{1}{2}xe^{2x} - \frac{1}{2} \int e^{2x} dx \\ &= \frac{1}{2}xe^{2x} - \frac{1}{4}e^{2x} + c \end{aligned}$$

## ALTERNATIVE 1

$\int e^{2x} x dx$

let  $u = e^{2x}$  so  $2x = \ln u$  and  $x = \frac{1}{2} \ln u$

$\frac{du}{dx} = 2e^{2x}$

$= \frac{1}{2} \times \frac{1}{2} \int \ln u du$

$= \frac{1}{4}(u \ln u - u) + c$

$= \frac{1}{4}e^{2x} \ln e^{2x} - \frac{1}{4}e^{2x} + c$

$= \frac{1}{4}e^{2x} 2x - \frac{1}{4}e^{2x} + c$

$= \frac{xe^{2x}}{2} - \frac{e^{2x}}{4} + c$

$$(c) \int \frac{3x-5}{x^2-2x-3} dx$$

$$\frac{3x-5}{x^2-2x-3} = \frac{3x-5}{(x-3)(x+1)} = \frac{1}{x-3} + \frac{2}{x+1} \quad (\text{cover-up method})$$

$$\begin{aligned} \therefore \int \frac{3x-5}{x^2-2x-3} dx &= \int \frac{1}{x-3} dx + \int \frac{2}{x+1} dx \\ &= \ln|x-3| + 2\ln|x+1| + c \end{aligned}$$

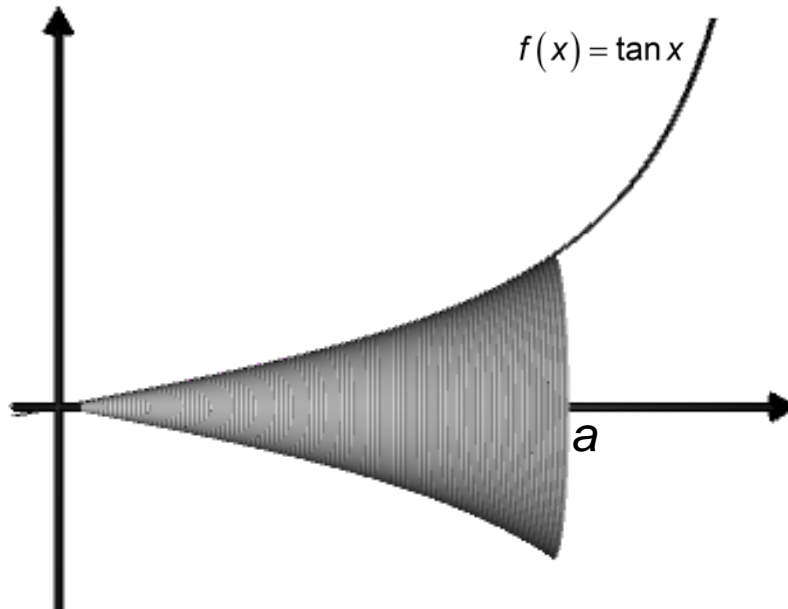
ALTERNATIVE

$$\begin{aligned} &\int \frac{3x-5}{x^2-2x-3} dx \\ &= \int \frac{2x-2}{x^2-2x-3} dx + \int \frac{x-3}{x^2-2x-3} dx \\ &= \ln|x^2-2x-3| + \int \frac{x-3}{(x+1)(x-3)} dx \\ &= \ln|x^2-2x-3| + \int \frac{1}{x+1} dx \\ &= \ln|x^2-2x-3| + \ln|x+1| + c \end{aligned}$$



**QUESTION 12**

The area bounded by the curve  $f(x) = \tan x$ , the  $x$ -axis, the line  $x = 0$  and the line  $x = a$ ,  $a < \frac{\pi}{2}$  is rotated about the  $x$ -axis.



Give an expression for the volume in terms of  $a$ .

$$\begin{aligned}\text{volume} &= \pi \int_0^a (\tan(x))^2 dx \\ &= \pi \int_0^a \tan^2 x dx \\ &= \pi \int_0^a \sec^2 x - 1 dx \\ &= \pi [\tan x - x]_0^a \\ &= \pi [\tan a - a] - \pi [\tan 0 - 0] \\ &= \pi [\tan a - a]\end{aligned}$$

**Total: 200 marks**